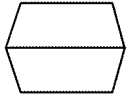


Time: 10 Minutes	Paper Math 2	Total Marks: 10
3rd Month, 4th Week, 4th Day		Syllabus: Review Exercise. Q # 4

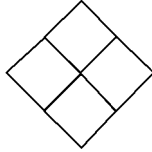
Q.1. Look at the fraction and colour each shape. (10)

فرکشن کے مطابق دی گئی اشکال کو رنگ کریں۔

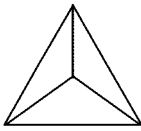
$\frac{1}{2}$



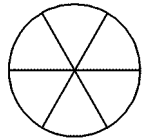
$\frac{1}{4}$



$\frac{1}{3}$



$\frac{5}{6}$



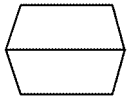
Time: 10 Minutes **Paper Math 2** **Total Marks: 10**

3rd Month, 4th Week, 4th Day **Syllabus: Review Exercise. Q # 4**

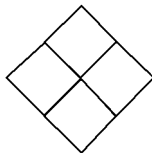
Q.1. Look at the fraction and colour each shape. (10)

فرکشن کے مطابق دی گئی اشکال کو رنگ کریں۔

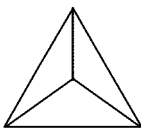
$\frac{1}{2}$



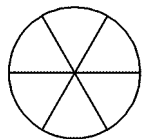
$\frac{1}{4}$



$\frac{1}{3}$



$\frac{5}{6}$

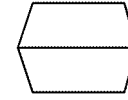


Time: 10 Minutes	Paper Math 2	Total Marks: 10
3rd Month, 4th Week, 4th Day		Syllabus: Review Exercise. Q # 4

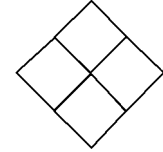
Q.1. Look at the fraction and colour each shape. (10)

فرکشن کے مطابق دی گئی اشکال کو رنگ کریں۔

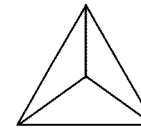
$\frac{1}{2}$



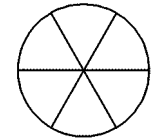
$\frac{1}{4}$



$\frac{1}{3}$



$\frac{5}{6}$



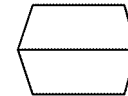
Time: 10 Minutes **Paper Math 2** **Total Marks: 10**

3rd Month, 4th Week, 4th Day **Syllabus: Review Exercise. Q # 4**

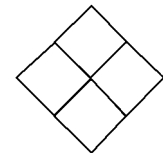
Q.1. Look at the fraction and colour each shape. (10)

فرکشن کے مطابق دی گئی اشکال کو رنگ کریں۔

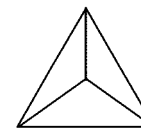
$\frac{1}{2}$



$\frac{1}{4}$



$\frac{1}{3}$



$\frac{5}{6}$

